







Monster Line-Up

The pupils in Class 3 at Monster High are all different heights.

<input type="text"/>	<input type="text"/>	<input type="text"/>	<input type="text"/>	<input type="text"/>	<input type="text"/>
					
1.1m	2.1m	1.9m	0.9m	0.6m	1.6m







Complete the statements by writing < or > in each box.

0.6m <input type="text"/>	1.1m	1.1m <input type="text"/>	0.9m	1.9m <input type="text"/>	0.6m
2.1m <input type="text"/>	1.9m	1.6m <input type="text"/>	2.1m	0.9m <input type="text"/>	1.6m

Use the clues to work out who's who and write the correct name of each monster in the boxes above. Think about which clues are the most useful starting points.

- Blob is shorter than Grin.
- Grin's height has a 6 in the tenths column.
- Bugz is the tallest.
- Grue is taller than Grin.
- Warp is exactly 1m shorter than Bugz.
- Fuzz is shorter than everyone.

Class 4 at Monster High have measured themselves more accurately.

<input type="text"/>	<input type="text"/>	<input type="text"/>	<input type="text"/>	<input type="text"/>	<input type="text"/>
					
2.18m	1.50m	1.05m	1.76m	1.18m	1.97m

Complete the statements by writing < or > in each box.

1.97m <input type="text"/>	1.32m	1.50m <input type="text"/>	1.76m	1.50m <input type="text"/>	1.05m
1.18m <input type="text"/>	1.05m	1.97m <input type="text"/>	1.18m	1.76m <input type="text"/>	1.32m

Use the clues to work out who's who and write the correct name of each monster in the boxes above. Think about which clues are the most useful starting points.

- Croc is the shortest.
- Ooze's height has a 7 in the tenths column.
- Octo's height has a 7 in the hundredths column.
- Fizz is 1m taller than Glob.
- Ooze is taller than Tangle.